



Les doubles


Exercice 1 : observe les dés et complète.




$$\underline{\quad} + \underline{\quad} = \underline{\quad}$$




$$\underline{\quad} + \underline{\quad} = \underline{\quad}$$




$$\underline{\quad} + \underline{\quad} = \underline{\quad}$$



$$\underline{\quad} + \underline{\quad} = \underline{\quad}$$



$$\underline{\quad} + \underline{\quad} = \underline{\quad}$$



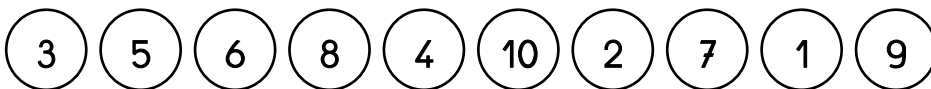
$$\underline{\quad} + \underline{\quad} = \underline{\quad}$$

Exercice 2 : relie les étiquettes.

8 + 8
7 + 7
9 + 9
10 + 10
6 + 6

20
16
12
14
18

Exercice 3 : colorie les bulles et leurs doubles de la même couleur.



1	2	3	4	5	6	7	8	9	10	11	12	13	14	15	16	17	18	19	20
---	---	---	---	---	---	---	---	---	----	----	----	----	----	----	----	----	----	----	----

Exercice 4 : complète.

$5 + \underline{\quad} = 10$

$\underline{\quad} + 4 = 8$

$6 + 6 = \underline{\quad}$

$\underline{\quad} + \underline{\quad} = 6$

$\underline{\quad} + \underline{\quad} = 14$

$10 + \underline{\quad} = 20$

$\underline{\quad} + \underline{\quad} = 18$

$\underline{\quad} + 2 = 4$

$8 + \underline{\quad} = 16$